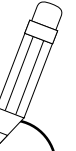



Smoothies

The friends are choosing smoothies. Help them total up!




Menu



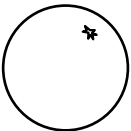
apple

10p




banana

15p



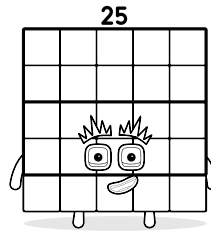
orange

20p



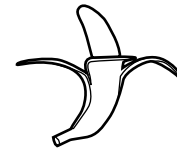

blueberry

25p

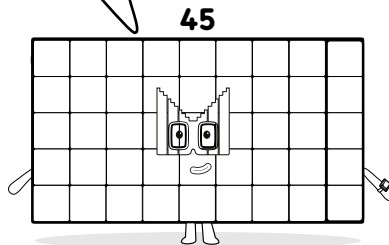


I'd like an apple and a banana, please.

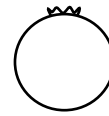
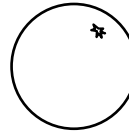
$$10 + 15 = \square$$



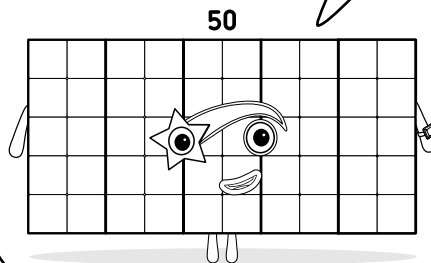
I'd like orange and blueberry, please.





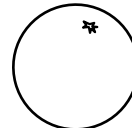
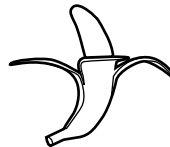


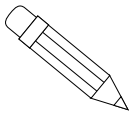


$$20 + 25 = \square$$




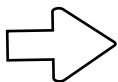
I'll have double blueberries, please.



$$25 + 25 = \square$$




Now draw lines to add the correct fruit to each glass.



Twenty-five



Forty-five



Fifty

BBC



As seen on
BBC
CBeebies

@Numberblocks
@Numberblocks
@Numberblocksofficial
@Numberblocksandfriends
Numberblocks

Make sure you download
Numberblocks World for
fun activities and games!

Continue the adventure
at numberblocks.tv



LEVEL 4